


Haur bakotzak baduen dirua idatz ezan/k.

Luka




..... €

Sara




..... €

Lili



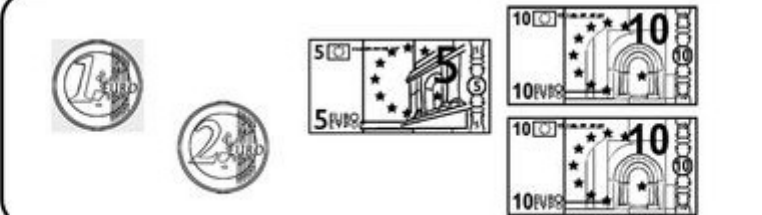
..... €

Jon



..... €

Sua



..... €

Haurren izenak berriidatz itzan/k, diru guttien duenetik diru gehien duenera.

.....

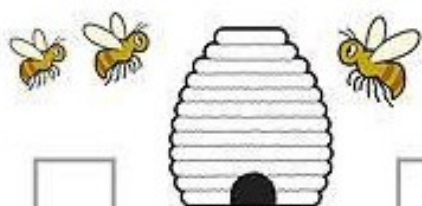
.....

.....

.....

.....

Gehiketa hauek kalkula itzan/k.



$$\begin{array}{r} \square \\ 56 \\ + 27 \\ \hline \end{array}$$

$$\begin{array}{r} \square \\ 48 \\ + 13 \\ \hline \end{array}$$

$$\begin{array}{r} \square \\ 69 \\ + 22 \\ \hline \end{array}$$

$$\begin{array}{r} \square \\ 79 \\ + 11 \\ \hline \end{array}$$

$$\begin{array}{r} \square \\ 28 \\ + 53 \\ \hline \end{array}$$

$$\begin{array}{r} \square \\ 17 \\ + 54 \\ \hline \end{array}$$

$$\begin{array}{r} \square \\ 34 \\ + 47 \\ \hline \end{array}$$

$$\begin{array}{r} \square \\ 21 \\ + 19 \\ \hline \end{array}$$

$$\begin{array}{r} \square \\ 34 \\ + 38 \\ \hline \end{array}$$

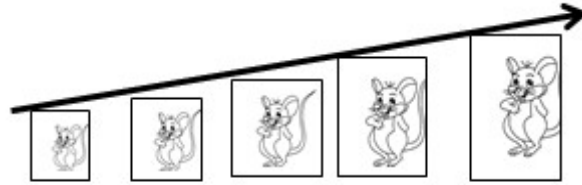
$$\begin{array}{r} \square \\ 45 \\ + 26 \\ \hline \end{array}$$

$$\begin{array}{r} \square \\ 82 \\ + 18 \\ \hline \end{array}$$

$$\begin{array}{r} \square \\ 38 \\ + 42 \\ \hline \end{array}$$



Lerro bakotzeko zenbakiak ttipienetik haundienera berridatz itzan/k.



36	72	60	59	50
----	----	----	----	----

.....

101	110	100	10	111
-----	-----	-----	----	-----

.....

326	601	620	340	342
-----	-----	-----	-----	-----

.....

88	120	314	340	200
----	-----	-----	-----	-----

.....

500	199	546	540	250
-----	-----	-----	-----	-----

.....

264	172	453	400	712
-----	-----	-----	-----	-----

.....

316	66	174	660	20
-----	----	-----	-----	----

.....