

IZENA:


Modeloa behatuz kalkulatu zenbat sagar geratzen diren zuhaitzean




$$\begin{array}{r} 3 \\ - 1 \\ \hline 2 \end{array}$$



$$\begin{array}{r} 3 \\ - 2 \\ \hline \end{array}$$



$$\begin{array}{r} 4 \\ - 1 \\ \hline \end{array}$$



$$\begin{array}{r} 4 \\ - 3 \\ \hline \end{array}$$



$$\begin{array}{r} 6 \\ - 1 \\ \hline \end{array}$$



$$\begin{array}{r} 6 \\ - 5 \\ \hline \end{array}$$








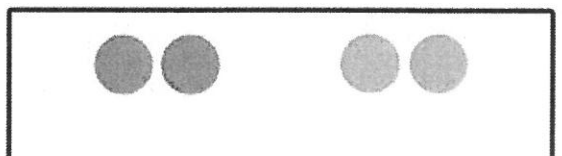



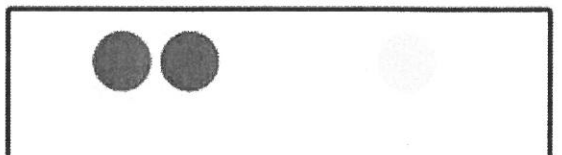
$$\begin{array}{r} 6 \\ - 2 \\ \hline \end{array}$$



$$\begin{array}{r} 6 \\ - 4 \\ \hline \end{array}$$

IZENA:

Geñitu kolore desberdinetako txitxak jakiteko zenbat diren osotara


$$2 + 5 =$$

$$1 + 7 =$$

$$4 + 1 =$$

$$8 + 2 =$$

$$5 + 3 =$$

$$2 + 2 =$$

$$3 + 6 =$$

$$3 + 4 =$$

$$1 + 1 =$$

$$2 + 1 =$$